

**Paper Reference ANM10/1A**  
**Pearson Edexcel Award**

**Number and Measure**  
**Level 1**  
**SECTION A**  
**(Calculator)**

**Diagram Booklet**

**In the boxes below, write your name,  
centre number and candidate number.**

<b>Surname</b>										
<b>Other names</b>										
<b>Centre Number</b>										
<b>Candidate Number</b>										

# INSTRUCTIONS

There may be spare copies of some diagrams in case you need them.

**THIS DIAGRAM BOOKLET MUST BE  
RETURNED WITH THE QUESTION  
PAPER AT THE END OF THE  
EXAMINATION.**

# **Contents**

## **Page**

**4 Question 3**

**5 Question 6**

**6 Question 7**

**7 Question 8**

**8 Question 9(a)**

**9 Question 9(b)**

**10 Question 10**

**11 Question 12**

**12 Question 13**

**13 Question 15**

**14 Question 16**

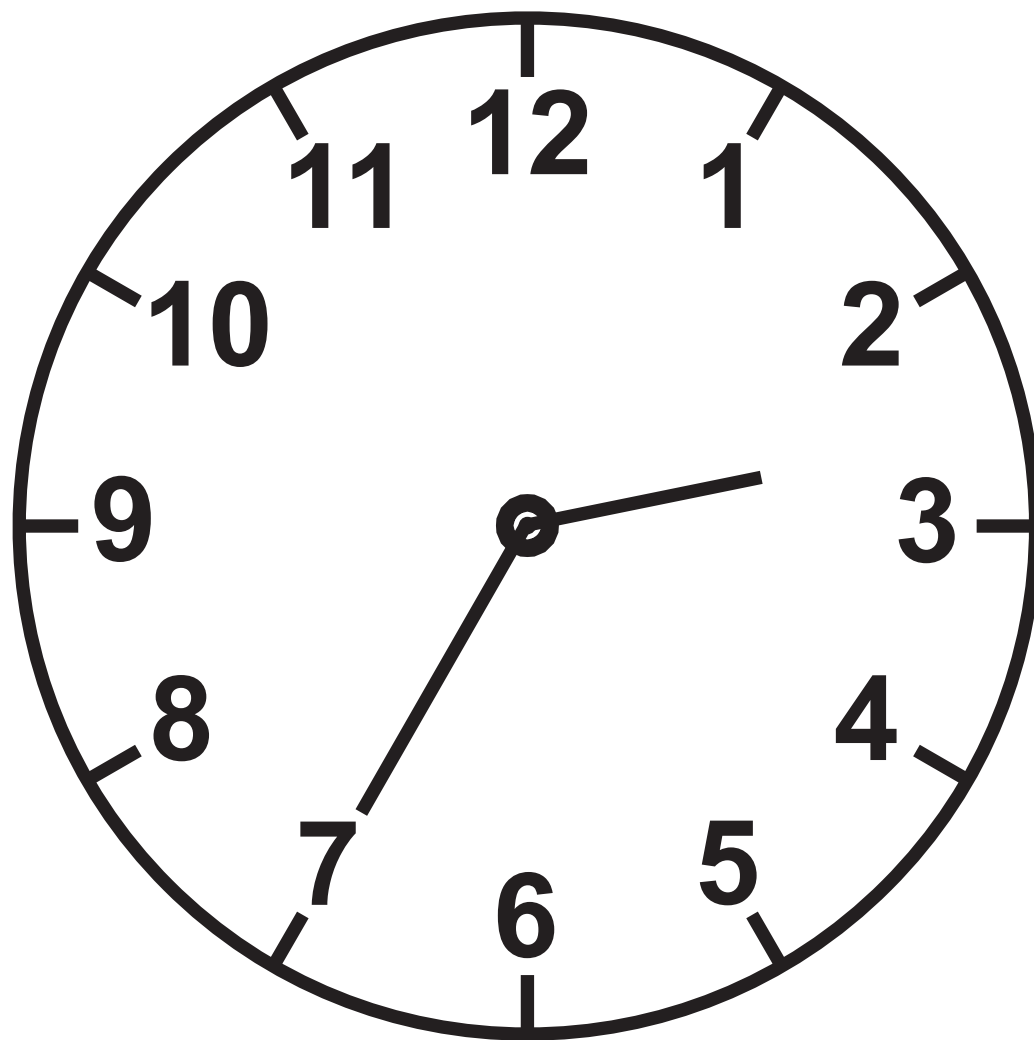
## **Spare Copies**

**15 Question 6**

**16 Question 9(a)**

**17 Question 16**

## Question 3



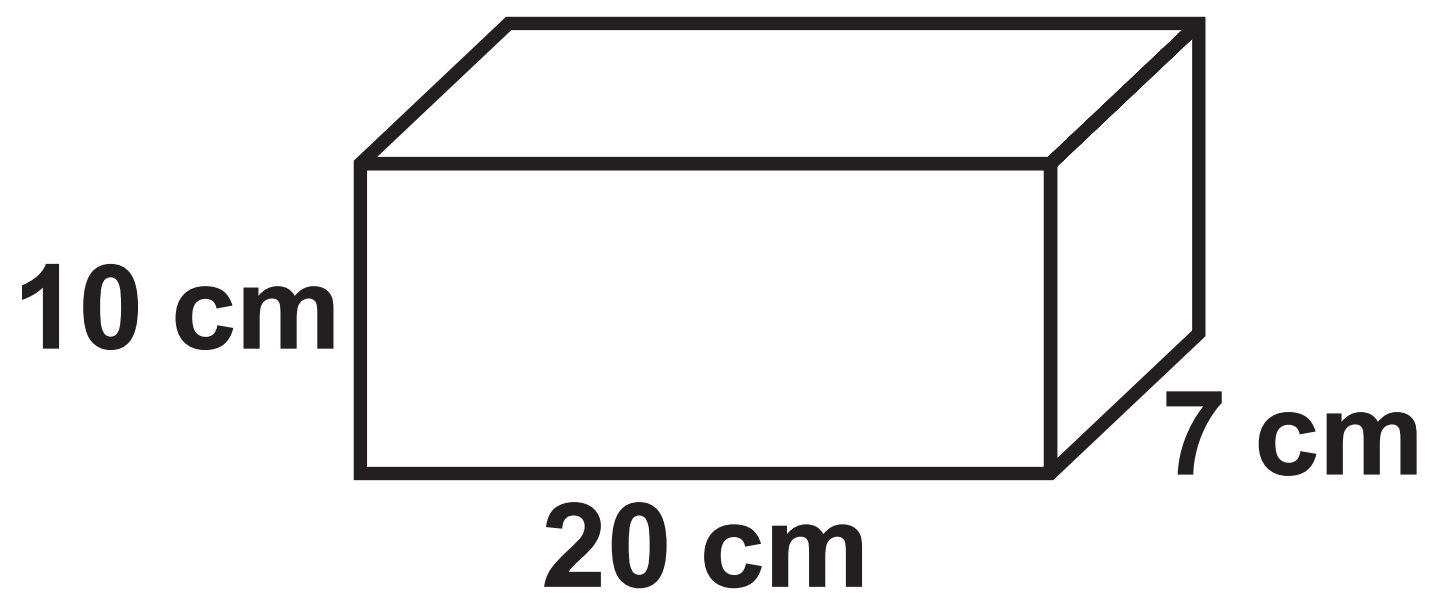
Question 6

May 2021						
Sun	Mon	Tue	Wed	Thu	Fri	Sat
						1
2	3	4	5	6	7	

Question 7

Price list	
sandwich	£2·75
pie	£3·20
packet of crisps	70 pence

Question 8

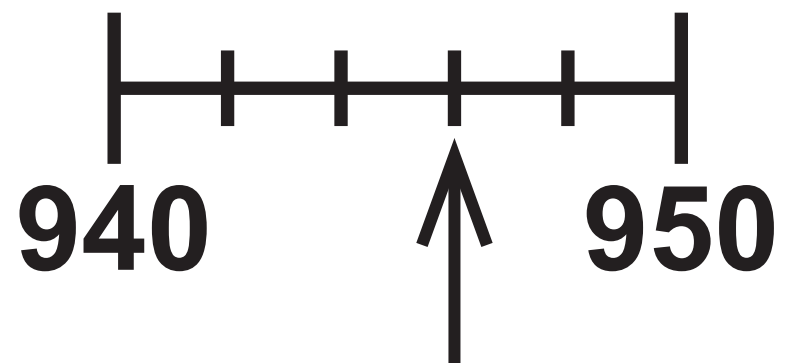


Question 9(a)

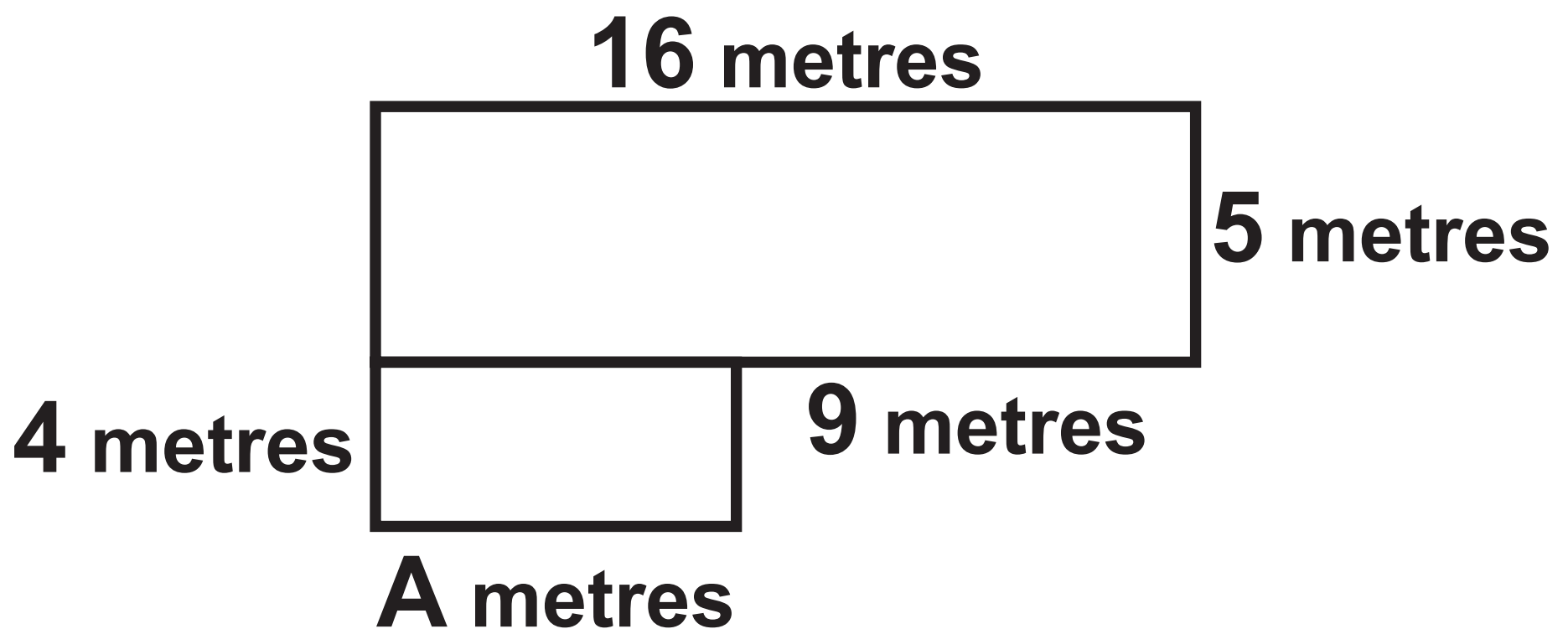




# Question 9(b)



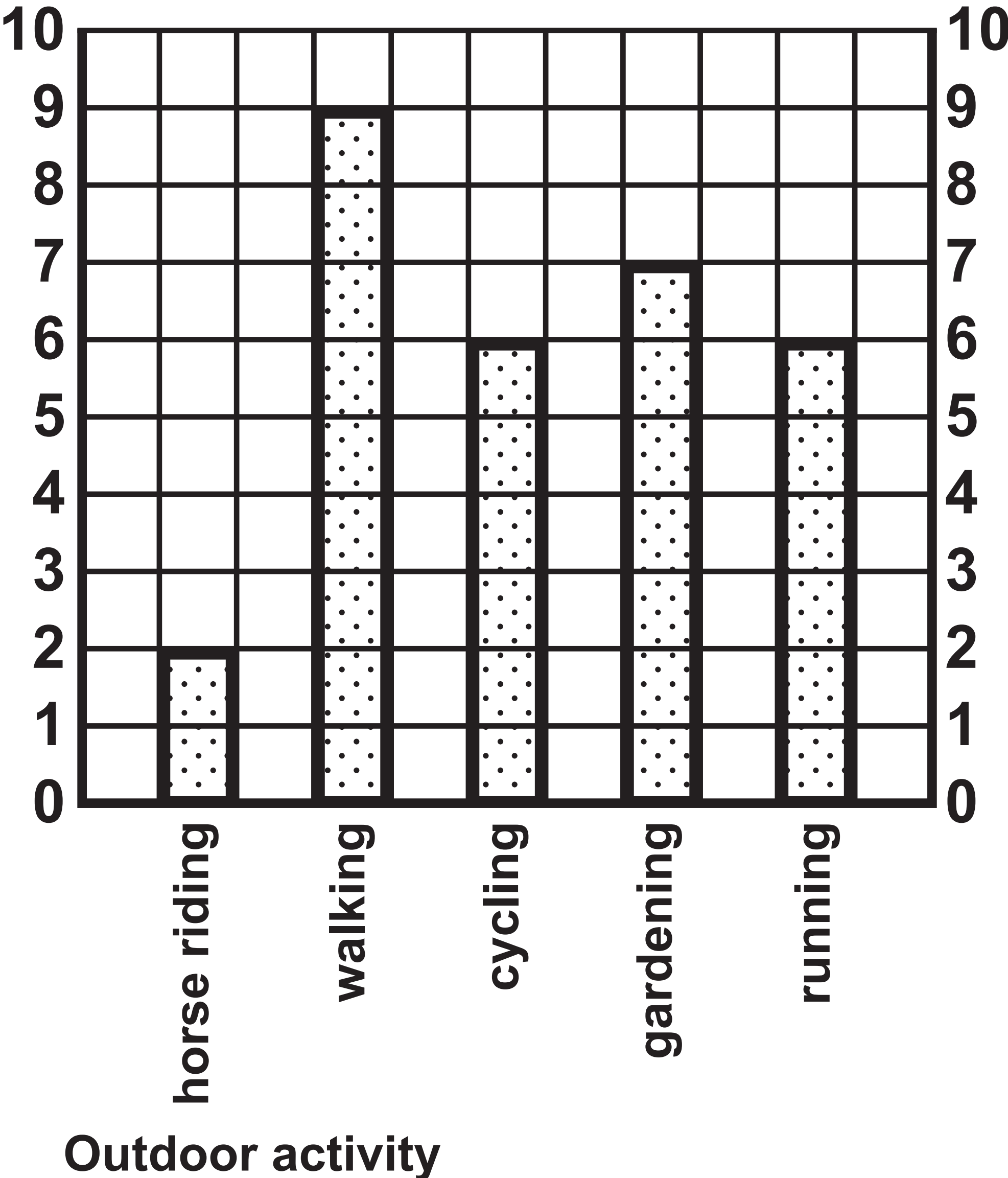
Question 10



Swindon to Highworth						
Swindon	06 55	08 31	08 57	09 09	09 24	
Lower Stratton	07 12	08 48	09 12	09 24	09 38	
South Marston	07 21	08 57	09 21	09 33	09 46	
Highworth	07 27	09 03	09 27	09 39	09 51	

Question 13

Frequency



Question 15

Pounds (£)	Dollars (\$)
1	1·15
2	2·30
5	5·75
10	11·50
50	57·50

<b>Electricity bill</b>	<b>April 2022</b>
<b>Reading 24th April</b>	<b>9503 units</b>
<b>Reading 25th January</b>	<b>8647 units</b>
<b>Number of units used</b>	<b>_____ units</b>
<b>Cost per unit of electricity:</b>	<b>£0.17</b>
<b>Quarterly charge:</b>	<b>£16.70 for this period</b>

May 2021						
Sun	Mon	Tue	Wed	Thu	Fri	Sat
						1
2	3	4	5	6	7	

Question 9(a)





<b>Electricity bill</b>	<b>April 2022</b>
<b>Reading 24th April</b>	<b>9503 units</b>
<b>Reading 25th January</b>	<b>8647 units</b>
<b>Number of units used</b>	<b>_____ units</b>
<b>Cost per unit of electricity:</b>	<b>£0.17</b>
<b>Quarterly charge:</b>	<b>£16.70 for this period</b>